


Plus och minus hör ihop. Räkna och skriv.

2




$$\underline{2} + \underline{0} = \underline{2}$$

$$\underline{0} + \underline{2} = \underline{2}$$

$$\underline{2} - \underline{0} = \underline{2}$$

$$\underline{2} - \underline{2} = \underline{0}$$

4




$$\underline{3} + \underline{1} = \underline{\quad}$$

$$\underline{1} + \underline{3} = \underline{\quad}$$

$$\underline{4} - \underline{1} = \underline{\quad}$$

$$\underline{4} - \underline{3} = \underline{\quad}$$

5



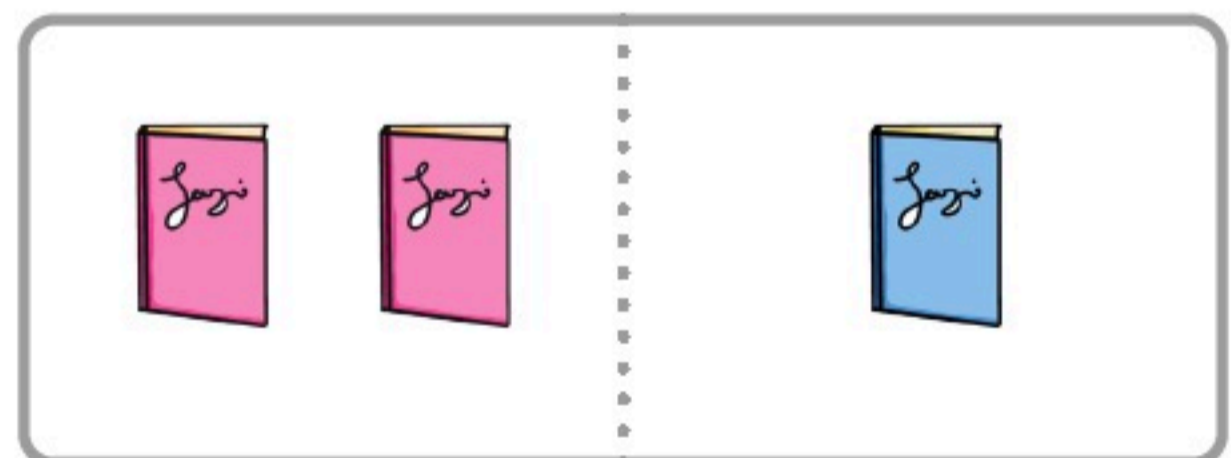
$$\underline{3} + \underline{2} = \underline{\quad}$$

$$\underline{2} + \underline{3} = \underline{\quad}$$

$$\underline{5} - \underline{2} = \underline{\quad}$$

$$\underline{5} - \underline{3} = \underline{\quad}$$

3



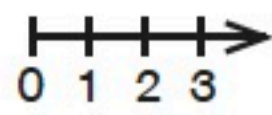
$$\underline{2} + \underline{1} = \underline{\quad}$$

$$\underline{1} + \underline{2} = \underline{\quad}$$

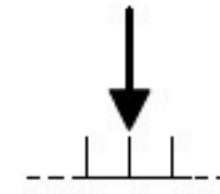
$$\underline{3} - \underline{1} = \underline{\quad}$$

$$\underline{3} - \underline{2} = \underline{\quad}$$

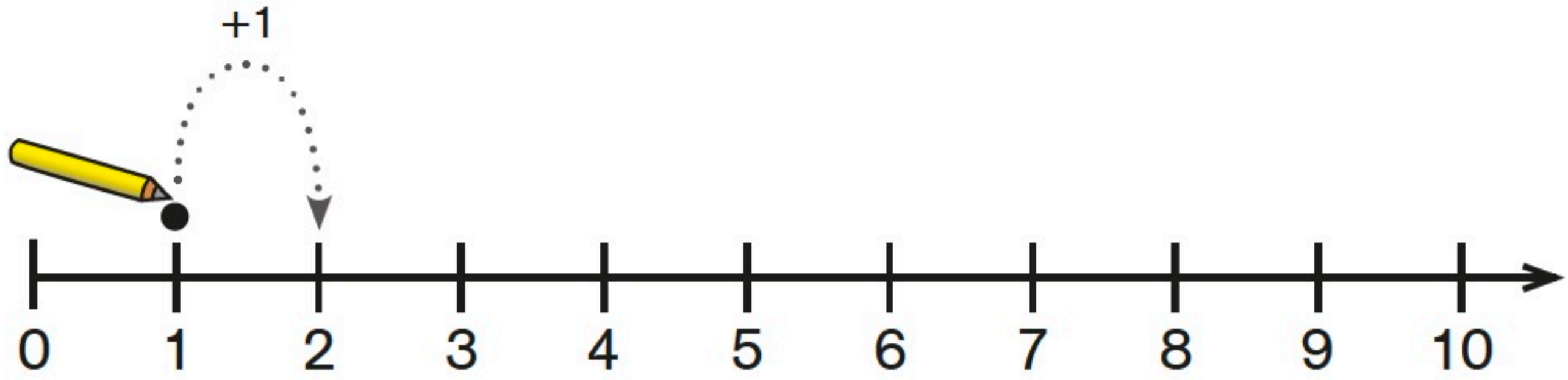
+



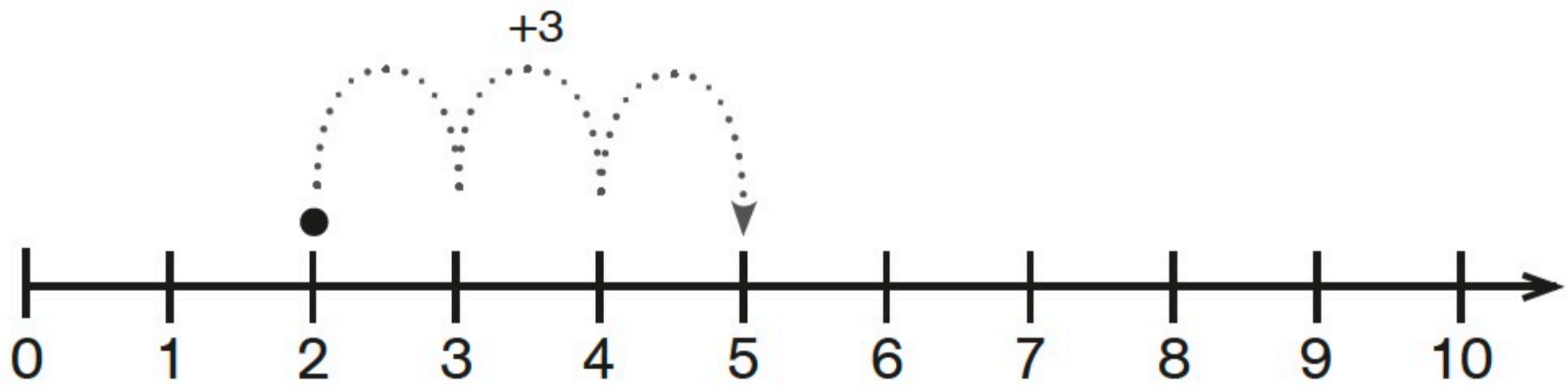
123



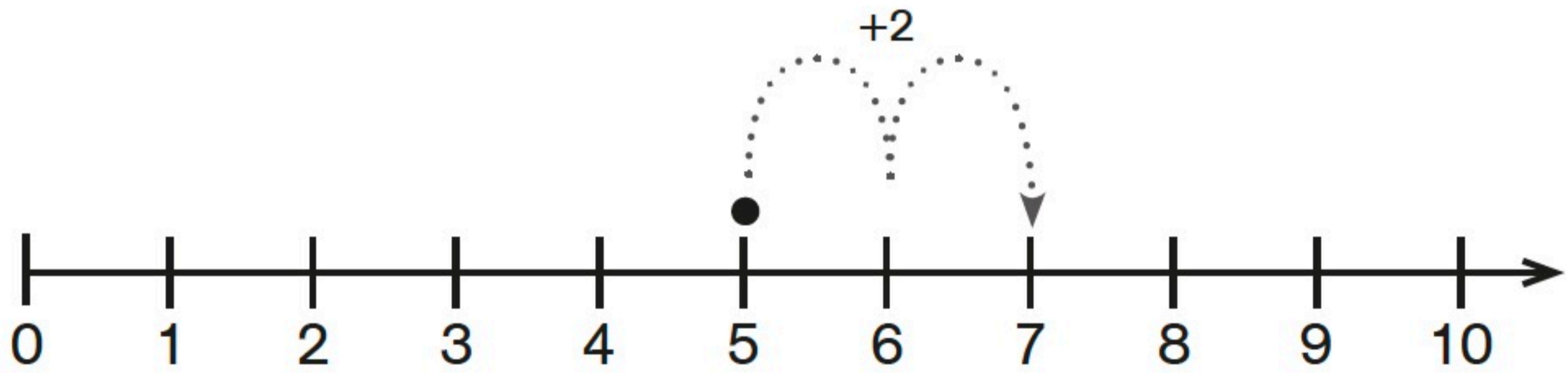
Lägg till på tallinjen. Skriv talet du hamnar på.



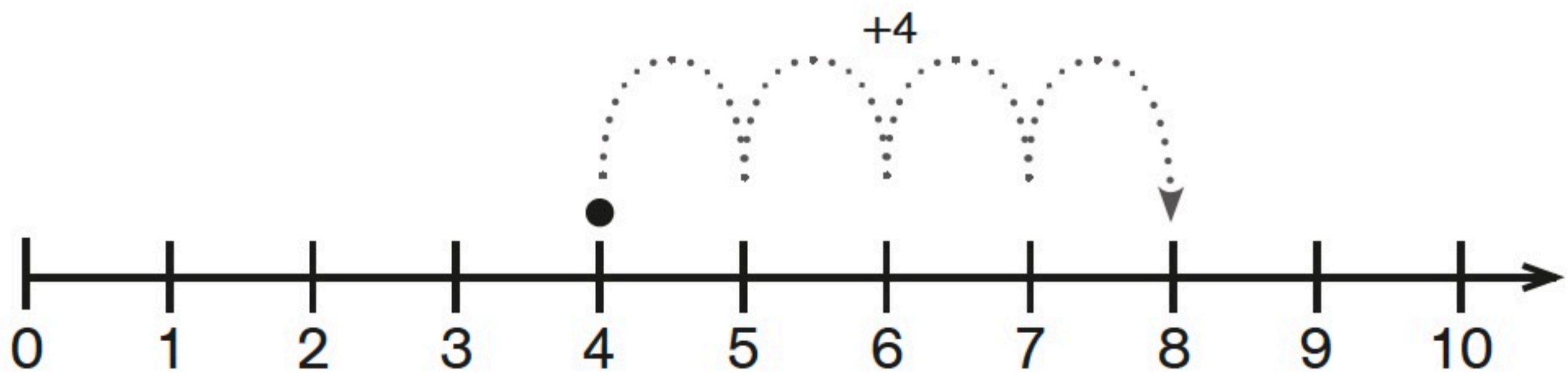
$$1 + 1 = \underline{\quad}$$




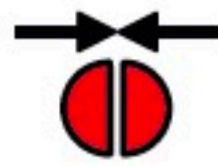
$$2 + 3 = \underline{\quad}$$



$$5 + 2 = \underline{\quad}$$



$$4 + 4 = \underline{\quad}$$



Plus och minus hör ihop. Räkna och skriv.

12



$$\underline{10} + \underline{2} = \underline{\quad}$$

$$\underline{2} + \underline{10} = \underline{\quad}$$

$$\underline{12} - \underline{2} = \underline{\quad}$$

$$\underline{12} - \underline{10} = \underline{\quad}$$

14



$$\underline{13} + \underline{1} = \underline{\quad}$$

$$\underline{1} + \underline{13} = \underline{\quad}$$

$$\underline{14} - \underline{1} = \underline{\quad}$$

$$\underline{14} - \underline{13} = \underline{\quad}$$

15



$$\underline{12} + \underline{3} = \underline{\quad}$$

$$\underline{3} + \underline{12} = \underline{\quad}$$

$$\underline{15} - \underline{3} = \underline{\quad}$$

$$\underline{15} - \underline{12} = \underline{\quad}$$

13



$$\underline{11} + \underline{2} = \underline{\quad}$$

$$\underline{2} + \underline{11} = \underline{\quad}$$

$$\underline{13} - \underline{2} = \underline{\quad}$$

$$\underline{13} - \underline{11} = \underline{\quad}$$




Dela upp 11. Skriv.

11

	9	
	8	
	7	
	6	
	5	
	4	
	3	
	2	

+

-



Plus och minus hör ihop. Räkna och skriv.

13



$9 + 4 =$
 $4 + 9 =$
 $13 - 4 =$
 $13 - 9 =$

13



$8 + 5 =$
 $5 + 8 =$
 $13 - 5 =$
 $13 - 8 =$

13



$7 + 6 =$
 $6 + 7 =$
 $13 - 6 =$
 $13 - 7 =$