



Lika många.

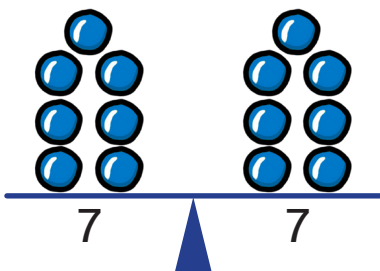
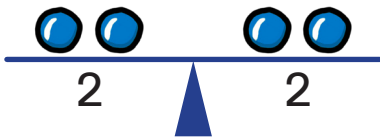
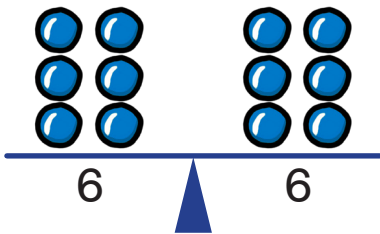

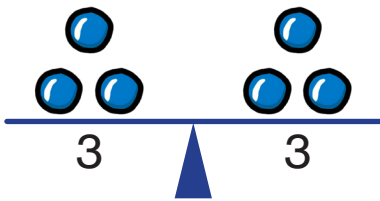


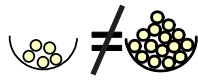
Spåra och skriv likhetstecknet.

1 →



2 →

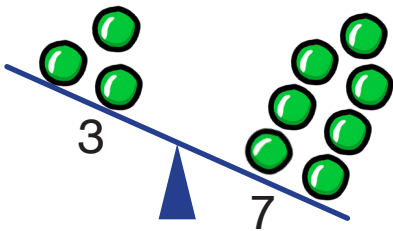
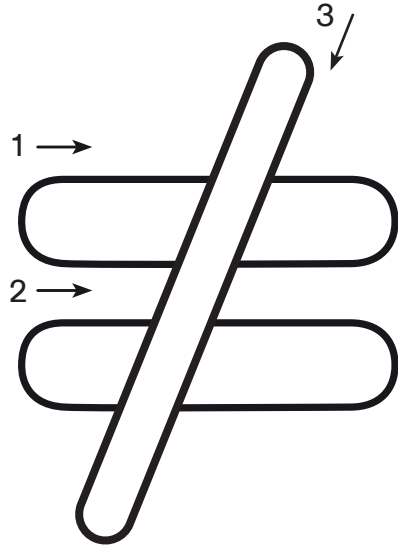




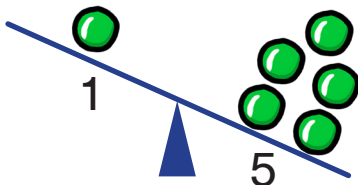
Olika många.



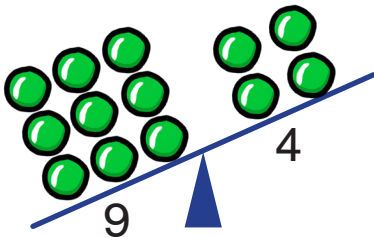
Spåra och skriv olikhetstecknet.



|        |  |  |  |  |
|--------|--|--|--|--|
| $\neq$ |  |  |  |  |
|--------|--|--|--|--|

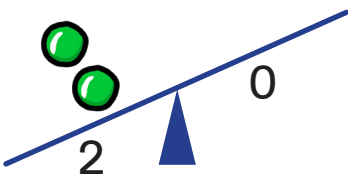


|        |  |  |  |  |
|--------|--|--|--|--|
| $\neq$ |  |  |  |  |
|--------|--|--|--|--|



$\neq$

---



$\neq$

---



Lika många eller olika många? Ringa in.

---



---



---












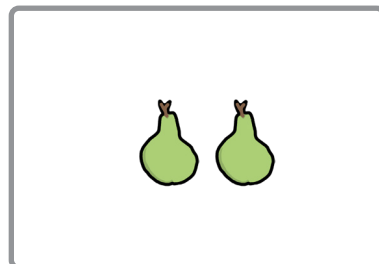




---



---

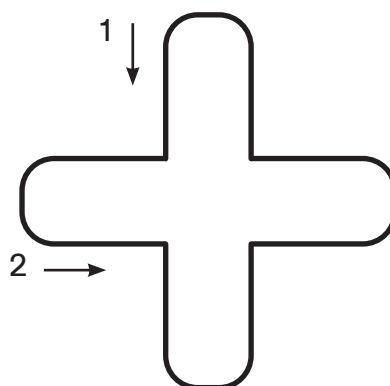


Lika många eller olika många? Skriv.






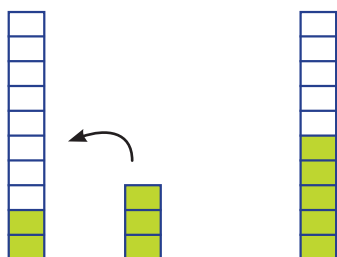

Addition.



Spåra och skriv plustecknet.




$$2 + 2 = 4$$



$$2 + 3 = 5$$

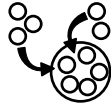


$$2 + 1 = 3$$



$$3 = 2 + 1$$





Skriv hur många de är tillsammans.

1 + 2 = 3

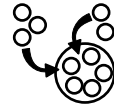

3 + 1 =         

2 + 3 =         

1 + 0 =         

1 + 1 =         

0 + 3 =



Skriv + och hur många de är tillsammans.

1 + 1 = 2

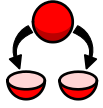
2 + 2 =

3 + 2 =

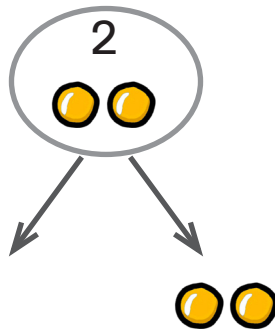


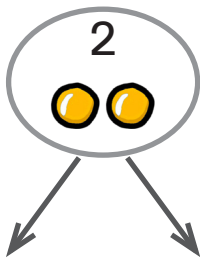
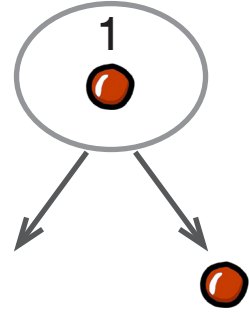

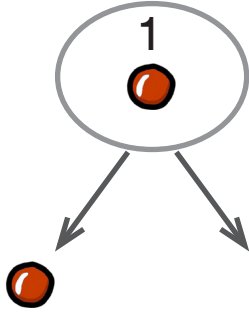
2 + 1 =

0 + 1 =

1 + 3 =



Dela upp 1 och 2. Skriv.







123



Skriv talen som saknas.

$\underline{\quad} + \underline{\quad} = 1$

$\underline{\quad} + \underline{\quad} = 1$

$\underline{\quad} + \underline{\quad} = 2$

$\underline{\quad} + \underline{\quad} = 2$

$\underline{\quad} + \underline{\quad} = 2$