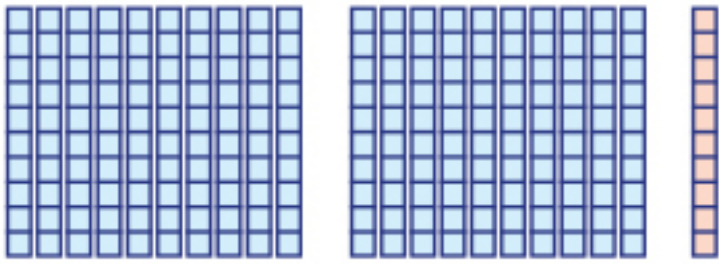




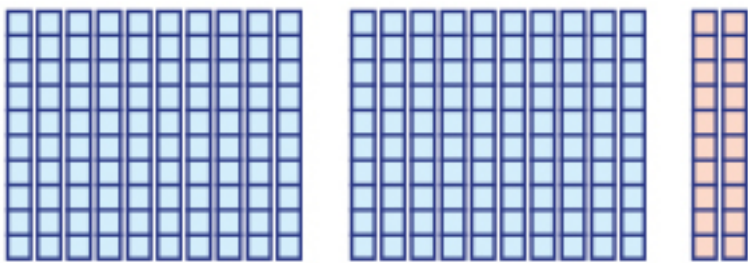
ROLIG RÄKNING 7

NINA ROSENBLAD

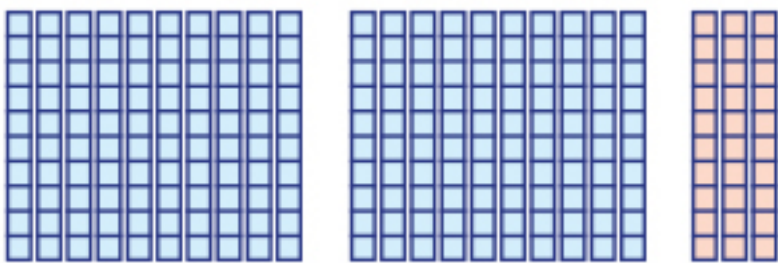
Skriv antalet rutor och summan av dem.



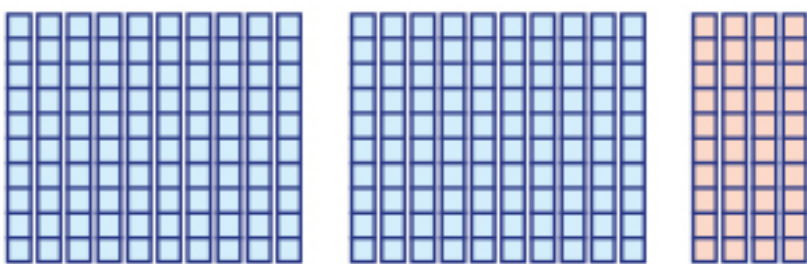
$$\underline{\hspace{2cm}} + \underline{\hspace{2cm}} = \underline{\hspace{2cm}}$$



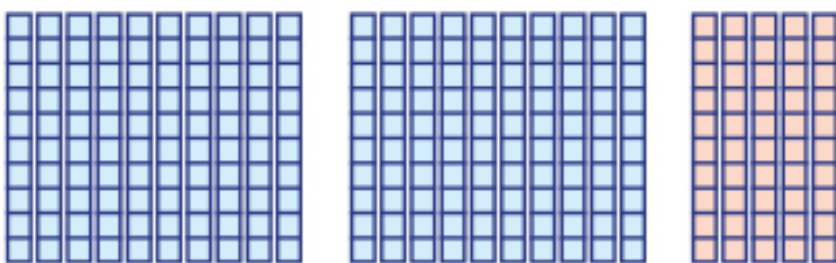
$$\underline{\hspace{2cm}} + \underline{\hspace{2cm}} = \underline{\hspace{2cm}}$$



$$\underline{\hspace{2cm}} + \underline{\hspace{2cm}} = \underline{\hspace{2cm}}$$



$$\underline{\hspace{2cm}} + \underline{\hspace{2cm}} = \underline{\hspace{2cm}}$$



$$\underline{\hspace{2cm}} + \underline{\hspace{2cm}} = \underline{\hspace{2cm}}$$

Addition

$200 + 10 = \underline{\hspace{2cm}}$

$200 + 60 = \underline{\hspace{2cm}}$

$200 + 20 = \underline{\hspace{2cm}}$

$200 + 70 = \underline{\hspace{2cm}}$

$200 + 30 = \underline{\hspace{2cm}}$

$200 + 80 = \underline{\hspace{2cm}}$

$200 + 40 = \underline{\hspace{2cm}}$

$200 + 90 = \underline{\hspace{2cm}}$

$200 + 50 = \underline{\hspace{2cm}}$

$200 + 100 = \underline{\hspace{2cm}}$

$10 + 200 = \underline{\hspace{2cm}}$

$30 + 200 = \underline{\hspace{2cm}}$

$40 + 200 = \underline{\hspace{2cm}}$

$20 + 200 = \underline{\hspace{2cm}}$

$100 + 200 = \underline{\hspace{2cm}}$

$50 + 200 = \underline{\hspace{2cm}}$

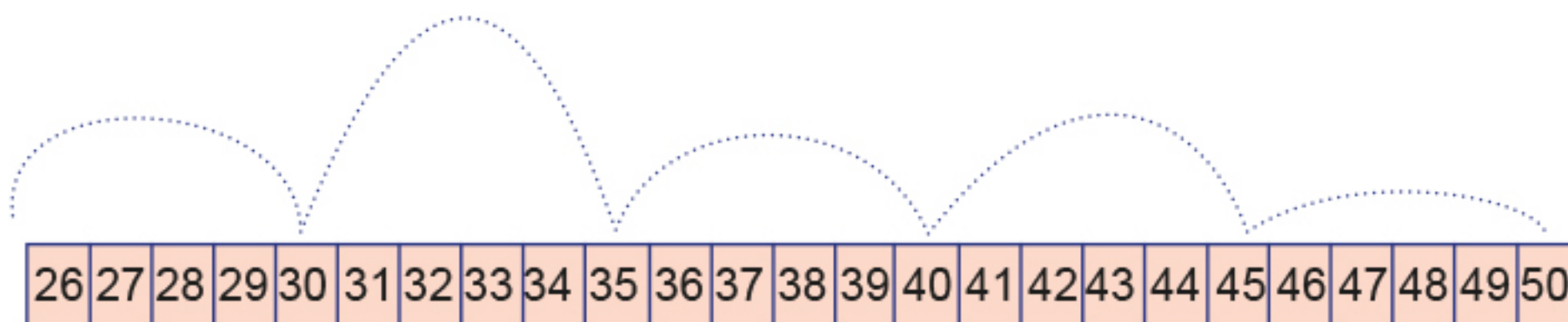
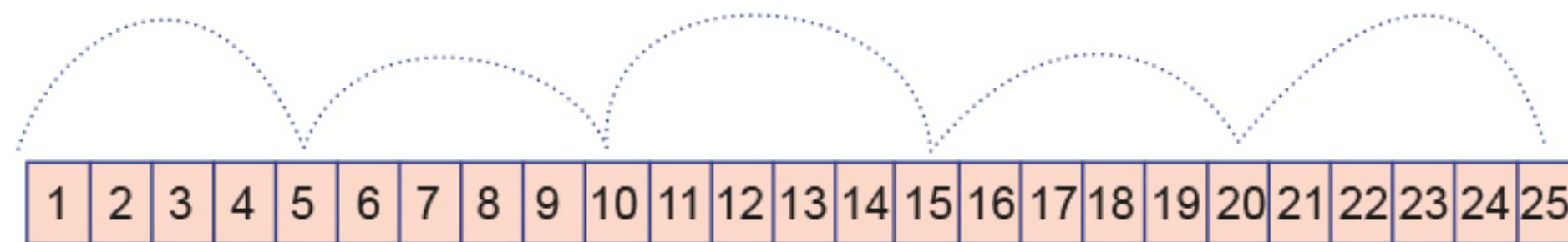
$60 + 200 = \underline{\hspace{2cm}}$

$70 + 200 = \underline{\hspace{2cm}}$

$80 + 200 = \underline{\hspace{2cm}}$

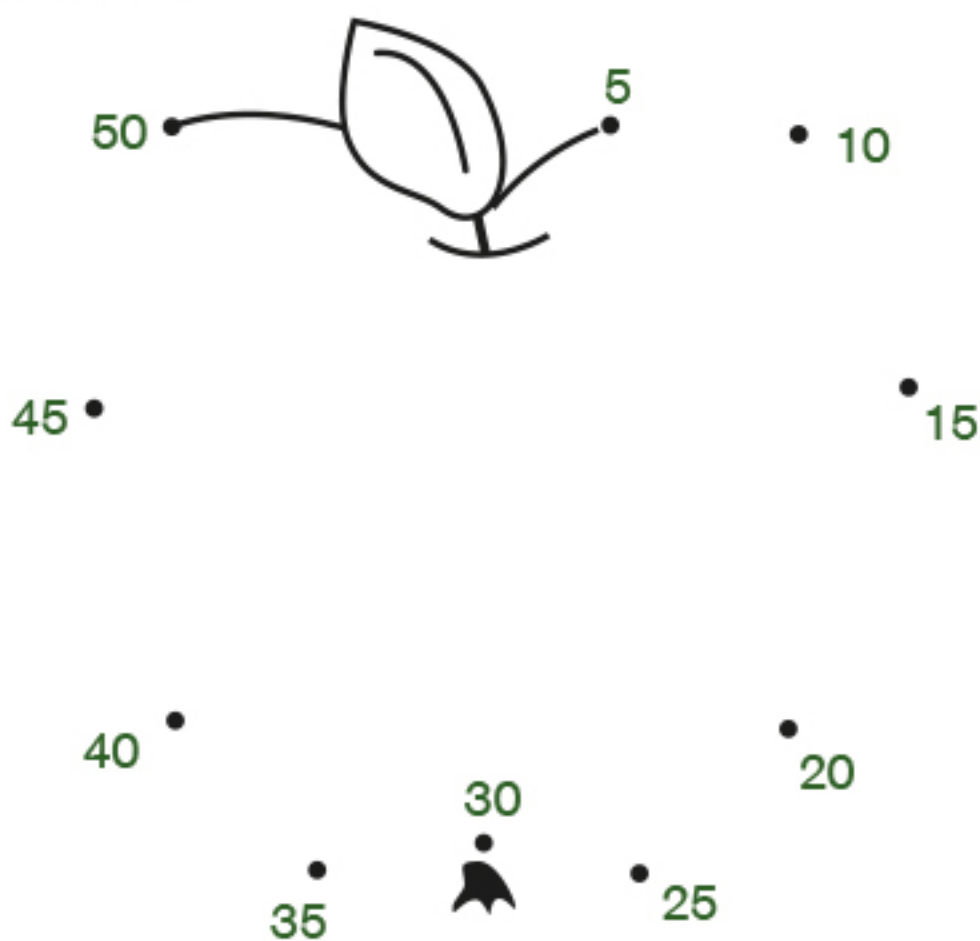
$90 + 200 = \underline{\hspace{2cm}}$

Rita 5 steg i taget.



Skriv talen som du landade på.

Dra streck från 5 till 50.



Räkna ihop hur många klubbor det är.
Skriv multiplikationen.



$$\underline{5} + \underline{\quad} + \underline{\quad} + \underline{\quad} = \underline{\quad}$$

$$\underline{4} \cdot \underline{5} = \underline{\quad}$$



$$\underline{\quad} + \underline{\quad} + \underline{\quad} = \underline{\quad}$$

$$\underline{\quad} \cdot \underline{5} = \underline{\quad}$$



$$\underline{\quad} + \underline{\quad} = \underline{\quad}$$

$$\underline{\quad} \cdot \underline{\quad} = \underline{\quad}$$



$$\underline{\quad} = \underline{\quad}$$

$$\underline{\quad} \cdot \underline{\quad} = \underline{\quad}$$

Dra streck till hur mycket klockan var för en kvart sedan.

