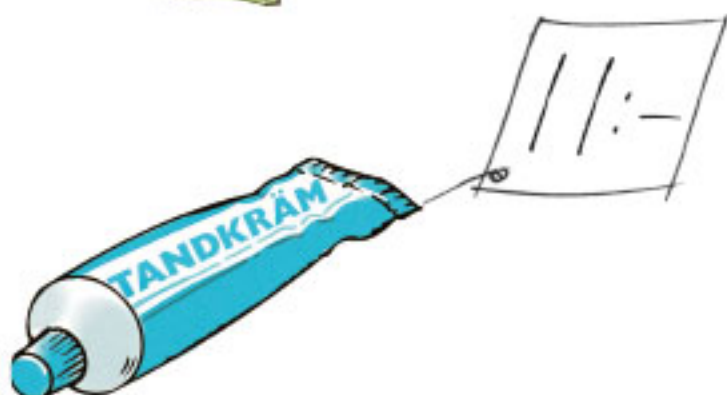





# ROLIG RÄKNING 2

LENA HEDLUND

På sakerna finns en prislapp.  
Dra streck mellan sak och pengar.



## Addition

$10 + 4 = \underline{\quad}$

$10 + 8 = \underline{\quad}$

$6 + 10 = \underline{\quad}$

$10 + 6 = \underline{\quad}$

$10 + 10 = \underline{\quad}$

$10 + 3 = \underline{\quad}$

$10 + 5 = \underline{\quad}$

$10 + 7 = \underline{\quad}$

$7 + 10 = \underline{\quad}$

$4 + 10 = \underline{\quad}$

$10 + 2 = \underline{\quad}$

$1 + 10 = \underline{\quad}$

$5 + 10 = \underline{\quad}$

$9 + 10 = \underline{\quad}$

$3 + 10 = \underline{\quad}$

$10 + 9 = \underline{\quad}$

$10 + 1 = \underline{\quad}$

$10 + 0 = \underline{\quad}$

$8 + 10 = \underline{\quad}$

$10 + 10 = \underline{\quad}$



$$10 \text{ kr} + 6 \text{ kr} = 16 \text{ kr}$$



$$10 + 6 = 16$$

Fyll i de tomma rutorna.

1		3		5		7		9	
11		13		15					

	2		4		6		8		10
	12		14		16				

1									

13	
----	--

15	
----	--


12	
----	--

11	
----	--

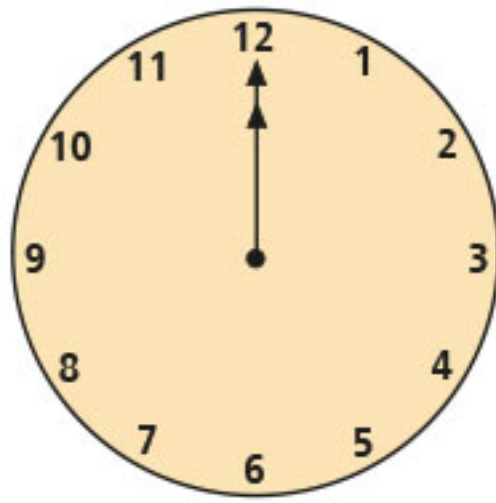
10	
----	--

11					
----	--	--	--	--	--


Hur mycket är klockan?




11




\_\_\_\_\_



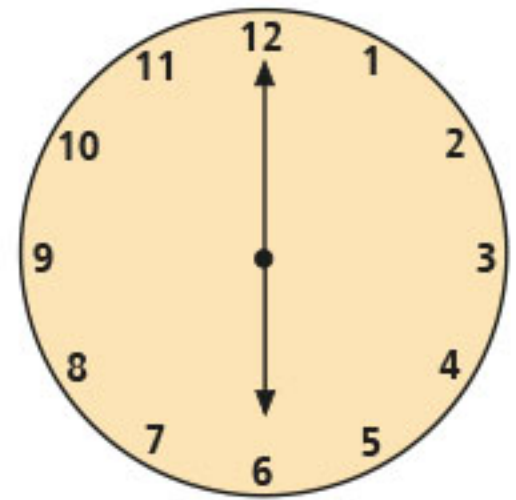
\_\_\_\_\_




\_\_\_\_\_




\_\_\_\_\_




\_\_\_\_\_



\_\_\_\_\_



\_\_\_\_\_



\_\_\_\_\_

# Addition och subtraktion

	1	2				1	8				1	4
+		7			-		7			+		3
<hr/>					<hr/>					<hr/>		
	1	9										
	1	5				1	3				1	6
-		5			+		3			-		5
<hr/>					<hr/>					<hr/>		
	1	5				1	7				1	7
+		4			-		7			+		1
<hr/>					<hr/>					<hr/>		
	1	9				1	3				1	8
-		9			+		5			-		3
<hr/>					<hr/>					<hr/>		